



AACE-PSP^{Q&As}

Planning & Scheduling Professional (PSP)

Pass AACE International AACE-PSP Exam with 100% Guarantee

Free Download Real Questions & Answers **PDF** and **VCE** file from:

<https://www.geekcert.com/aace-psp.html>

100% Passing Guarantee
100% Money Back Assurance

Following Questions and Answers are all new published by AACE International Official Exam Center

-  **Instant Download** After Purchase
-  **100% Money Back** Guarantee
-  **365 Days** Free Update
-  **800,000+** Satisfied Customers





QUESTION 1

In its simplest form, what is the main drawback of critical path method scheduling?

- A. It requires a backward pass to calculate late dates.
- B. It assumes that resources are unlimited.
- C. It doesn't account for interdependent between activities.
- D. It allows for Precedence Diagramming Method to be used in place of Arrow Diagramming Method.

Correct Answer: B

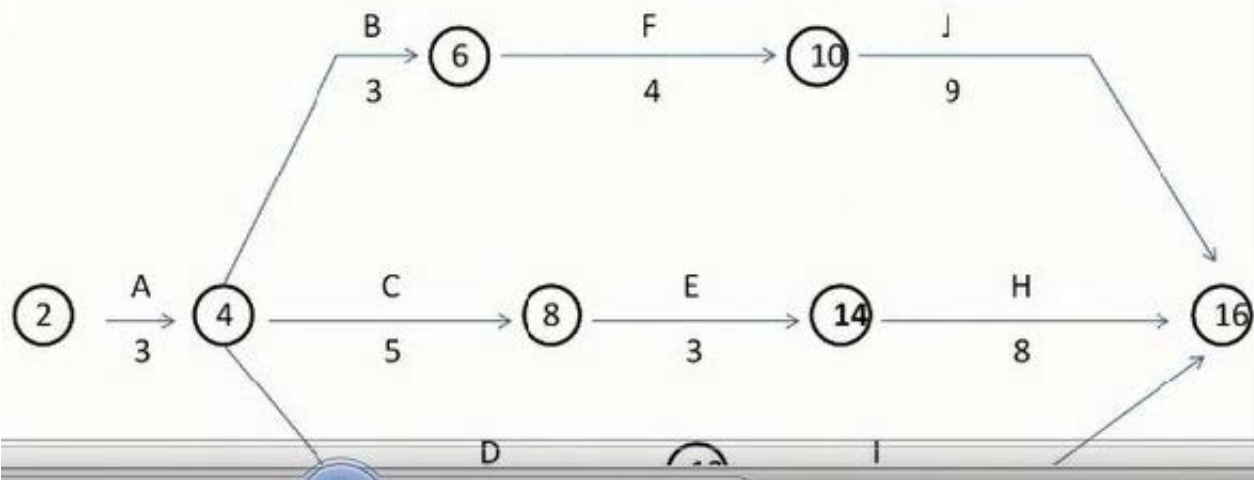
QUESTION 2

The activity with the most total float is:



Refer to the following table and diagram to answer the following questions. Consider this to be the entire network. The diagram is incomplete. This table represents activities, predecessors and durations for a hazardous waste incineration facility:

Activity	Description	Predecessors	Duration (months)
A	Develop information for public hearings		3
B	Hold public hearings	A	3
C	Develop draft plans and specifications	A	5
D	Contact stakeholders and others	A	7
E	Obtain permits	B, C	3
F	Order equipment for facility	B	4
G	Procure and prepare land.	B	6
H	Construct facility	D, E, F & G	8
I	Approval of operating procedures	D	6
J	Install equipment, staff, faculty	F	9



- A. Activity I.
- B. Activity C.
- C. Activity F.
- D. Activity D.

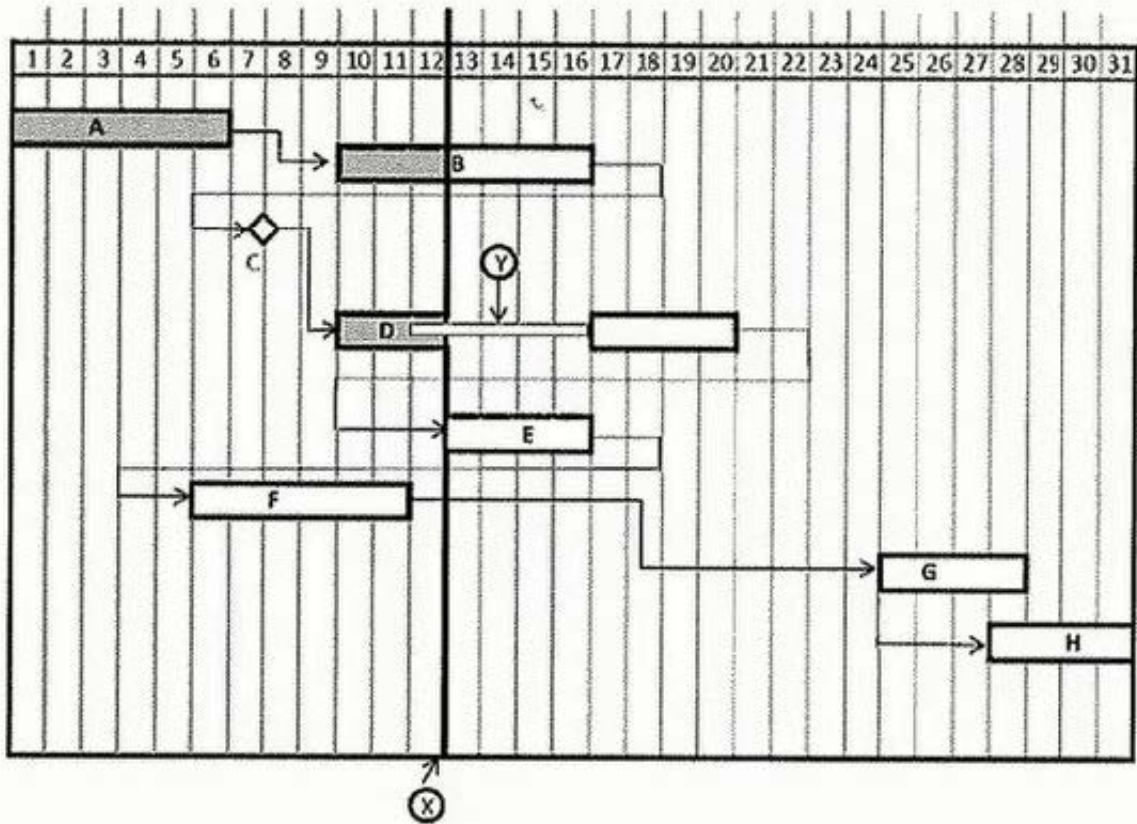
Correct Answer: A

QUESTION 3

What does the heavy, vertical line at "X" represent?



Refer to the time-scaled network diagram and other information to answer the following questions. Please consider this to be the entire network.



- A. Delay fault line.
- B. The status or data date.
- C. Change-over limits.
- D. International Date Line.

Correct Answer: B

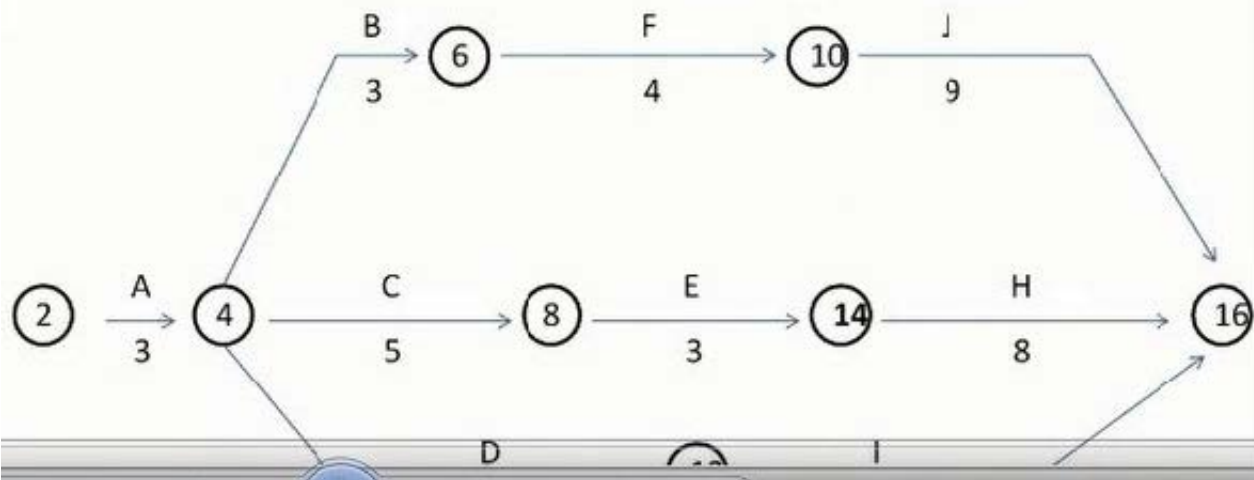
QUESTION 4

What is the free float for Activity F?



Refer to the following table and diagram to answer the following questions. Consider this to be the entire network. The diagram is incomplete. This table represents activities, predecessors and durations for a hazardous waste incineration facility:

Activity	Description	Predecessors	Duration (months)
A	Develop information for public hearings		3
B	Hold public hearings	A	3
C	Develop draft plans and specifications	A	5
D	Contact stakeholders and others	A	7
E	Obtain permits	B, C	3
F	Order equipment for facility	B	4
G	Procure and prepare land.	B	6
H	Construct facility	D, E, F & G	8
I	Approval of operating procedures	D	6
J	Install equipment, staff, faculty	F	9



- A. 3 months.
- B. 0months.
- C. 1months.
- D. 2month.

Correct Answer: B

QUESTION 5

If no time extensions are granted and all actual delays are as described above, what will the total float calculation be at the end of the project?



- A. 0 calendar days.
- B. -14 calendar days.
- C. -20 calendar days.
- D. 10 calendar days.

Correct Answer: B

[AACE-PSP Study Guide](#)

[AACE-PSP Exam Questions](#)

[AACE-PSP Braindumps](#)